









The Frog Pond

Guided Investigation (1)

Game Information			
There are 6 frogs in the pond		The dice is labelled:	
			1 in
			2 in
			3 in
			1 out
			2 out
			3 out

- Is it possible to empty the pond in ...

1 roll of the dice?	
2 rolls of the dice?	
3 rolls of the dice?	
4 rolls of the dice?	
5 rolls of the dice?	
6 rolls of the dice?	

- What is the least number of rolls needed to empty the pond?
- What is the least number of rolls needed to empty the pond if there were 7 frogs in the pond?



- What is the least number of rolls needed to empty the pond if there were 8 frogs in the pond?



- What is the least number of rolls needed to empty the pond if there were 9 frogs in the pond?



- Can you find a pattern?