

Hunting For Stars Test

Created by Greg Lee, Rosebud Secondary College
Reproducible Page

NAME:

CLASS:

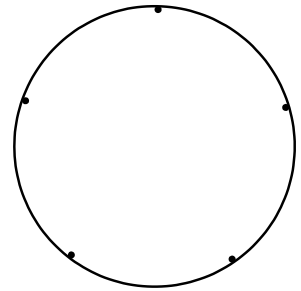
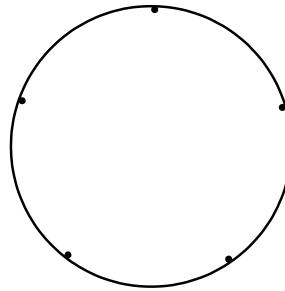
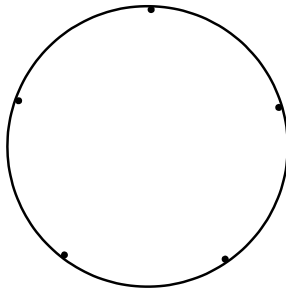
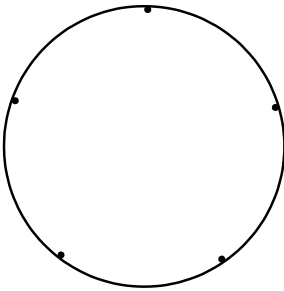
1. Draw the following 5 Point 'Stars':

$5/1$

$5/2$

$5/3$

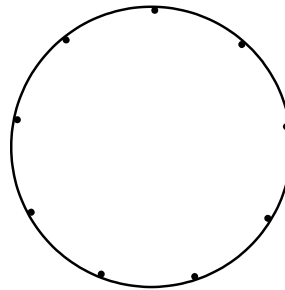
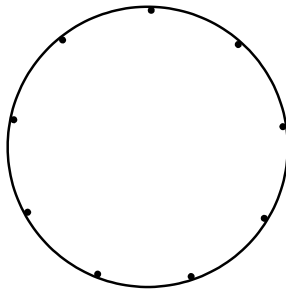
$5/4$



2. Draw the following 9 Point 'Stars':

$9/2$

$9/3$



3. Describe what the following 'Stars' look like:

a) $7/3$

b) $8/2$

c) $9/5$

d) $10/9$

e) $16/4$

f) $27/5$